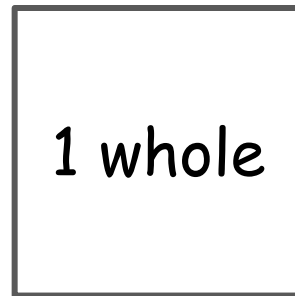
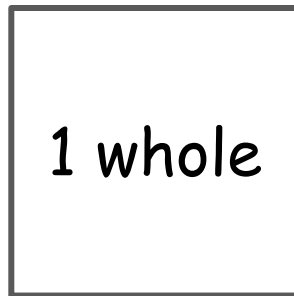
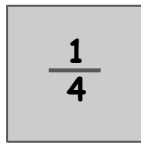


Name \_\_\_\_\_

Date \_\_\_\_\_

## Fractions Greater Than 1

1. How many fourths do you need to fill 2 wholes? Explain your thinking.



2. How many wholes can you cover with 7 thirds? Explain your thinking.

