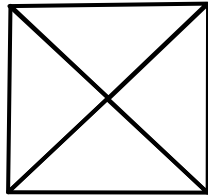
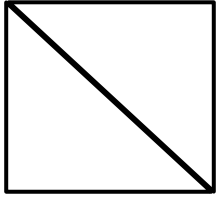


Name: _____

Date: _____

Naming Unit Fractions

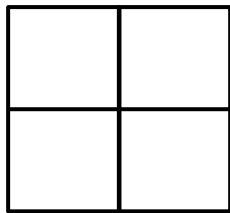
Draw a line from each shape to the name of the unit fraction.




halves



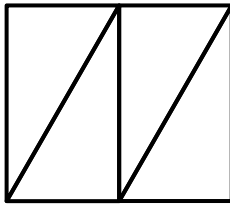
thirds




fourths



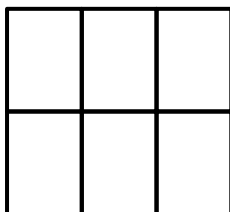
fifths



sixths



sevenths



eighths

