

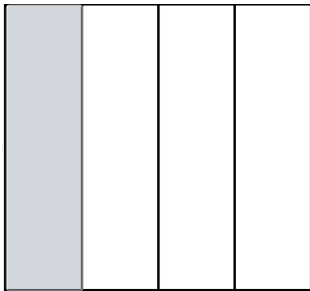
Name \_\_\_\_\_

Date \_\_\_\_\_

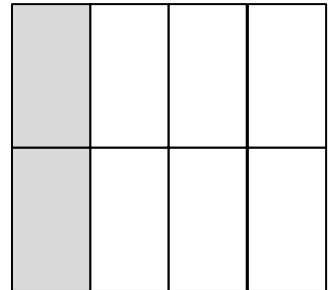
# Decomposing Unit Fractions

Name the fraction on the left and find its equivalent with the given parts  
Sketch your result on the right.

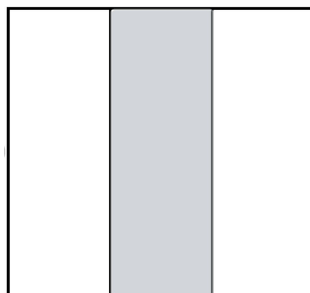
1)



$$\frac{1}{4} = \frac{2}{8}$$




2)




$$\frac{1}{3} = \frac{2}{6}$$



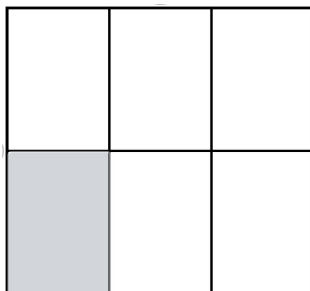
3)



$$\frac{1}{5} = \frac{3}{15}$$



4)

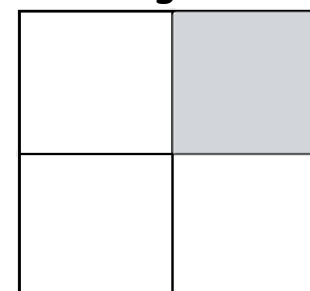


$$\frac{1}{6} = \frac{2}{12}$$



## Challenge

5)



$$\frac{1}{4} = \frac{4}{16}$$

