


Name \_\_\_\_\_

Date \_\_\_\_\_


## Beaker Problem Sheet

How full is each beaker?


1)



2)



3)



How did you decide?

Fill each square with the fraction on the left.

4)

$\frac{4}{5}$



5)

$\frac{3}{4}$



6)

$\frac{10}{11}$



How did you decide?

Create your own fraction and use it fill in the square.

7)

\_\_\_\_\_



8)

\_\_\_\_\_



9)

\_\_\_\_\_

